

Name: _____

Date: _____

Getting Ready for 1st Grade Pretest

Directions: Answer the questions.

1. Say the name for the picture. What letter makes the beginning sound?



- (A) j
(B) g


- (C) m
(D) u
-

2. What is the vowel in the word  ?

- (A) a
(B) e

- (C) o
(D) u
-

3. Which word rhymes with  ?



Name: _____

Date: _____

Getting Ready for 1st Grade Pretest *(cont.)*

4. Change a letter to make a new word.



fan

5. Which sentence tells about the picture?



- (A) The hat has a rat. (C) The cat has a hat.
(B) The rat has a hat. (D) The cat has a bat.

6. Write the sentence correctly.

i am six.

7. Spell the word.



Name: _____ Date: _____

Getting Ready for 1st Grade Pretest *(cont.)*

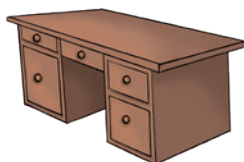
8. Count by one from the first number. Write each number you count.

8, 9, _____, _____, _____

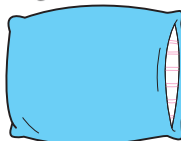
9. Draw a triangle.

10. Which object is lighter than a  ?

(A)



(C)



(B)



(D)



11. Draw a picture to show how to solve $2 + 3 = 5$.

Name: _____

Date: _____

Getting Ready for 1st Grade Pretest *(cont.)*

12. There are 3 apples. Jane eats 1. How many are left?



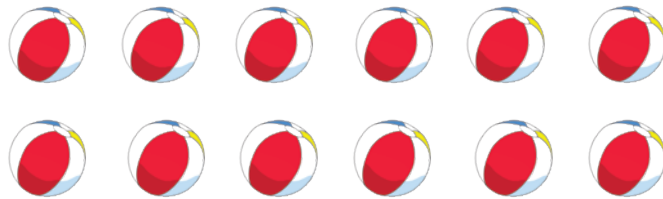
(A) 3

(C) 1

(B) 2

(D) 0

13. Count the objects. Write the number.



14. Which is more than ●●●●●? Mark all correct answers.

(A) ▲▲▲▲▲▲

(C) ■■■■■

(B) ■■■■■■

(D) ◆◆◆




Name: _____

Date: _____

Getting Ready for 1st Grade Posttest

Directions: Answer the questions below.

1. Say the name of the picture. What letter makes the beginning sound?



(A) l

(C) h

(B) j

(D) i

-
2. What is the vowel in the word?



(A) a

(C) o

(B) e

(D) u

-
3. Which word or words rhyme with



(A)



(C)



(B)



(D)



Getting Ready for 1st Grade Posttest (cont.)

4. Change a letter to make a new word.



mop

5. Which sentence tells about the picture?



- (A) The mop has a dog. (C) The dog has a mug.
- (B) The dog has a mop. (D) The pig has a nut.

6. Write the sentence correctly.

i can run.

7. Spell the word.



Name: _____ Date: _____


Getting Ready for 1st Grade Posttest (cont.)

8. Count by one from the first number. Write each number you count.

11, 12, _____, _____, _____

9. Draw a rectangle.

10. What is heavier than a  ?



11. Draw a picture to show how to solve $4 + 2 = 6$.

Name: _____

Date: _____

Getting Ready for 1st Grade Posttest *(cont.)*

12. There are 5 nuts. I eat 2. How many are left?




(A) 2

(C) 3

(B) 5

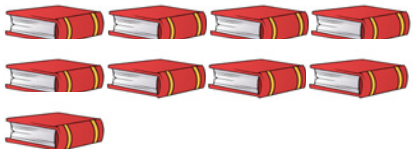
(D) 7

13. Count the objects. Write the number.



14. Which is less than ?
Mark all correct answers.

(A) 

(C) 

(B) 

(D) 

Answer Key

Pretest

1. B
2. D
3. B
4. Answers will vary.
Possible answers include:
fun, fin, fat, can, man,
tan.
5. B
6. I am six.
7. pot (or pan)
8. 10, 11, 12
9. Drawings will vary, but
should show a triangle.
10. C
11. Answers will vary.
12. B
13. 12
14. A and B

Posttest

1. C
2. B
3. C and D
4. Answers will vary.
Possible answers include:
map, cop, top, mom,
mow.
5. B
6. I can run.
7. pin
8. 13, 14, 15
9. Drawings will vary, but
should show a rectangle.
10. B and C
11. Answers will vary.
12. C
13. 15
14. A and D